

# Assessment

## Map Reading: Topographic Map



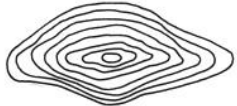

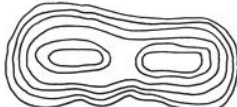

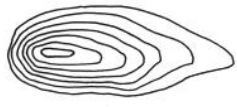



Name \_\_\_\_\_

Date \_\_\_\_\_

### True and False

1. \_\_\_\_\_ Contour line portray the shape and elevation of the land.
2. \_\_\_\_\_ An eight digit grid coordinate is more accurate than one with six digits.
3. \_\_\_\_\_ Topographic maps portray both natural and manmade features.
4. \_\_\_\_\_ A map scale of 1:24000 means that 1 inch on the map represent about 200 feet on land.
5. \_\_\_\_\_ Using a Military Coordinate Scale and Protractor will allow you to find an accurate grid address

### Matching

6. _____		
7. _____		
8. _____		
9. _____		
10. _____		
11. _____	